

Name _____

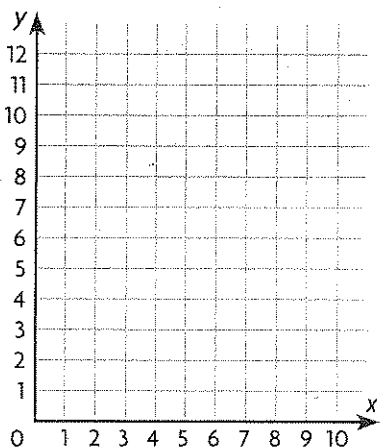
Share and Show



Graph and label the related number pairs as ordered pairs.
Then complete and use the rule to find the unknown term.

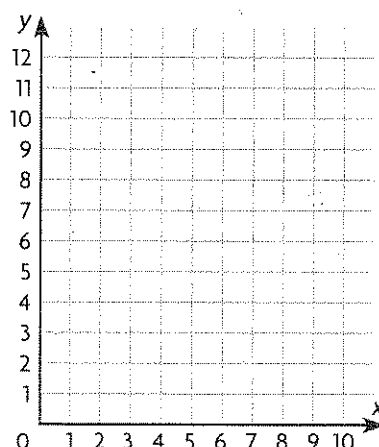
- ✓ 1. Multiply the number of tablespoons by _____
to find its weight in ounces.

Butter (tbsp)	1	2	3	4	5
Weight (oz)	2	4	6	8	



- ✓ 2. Multiply the number of hours by _____
to find the distance in miles.

Time (hr)	1	2	3	4
Distance walked (mi)	3	6	9	

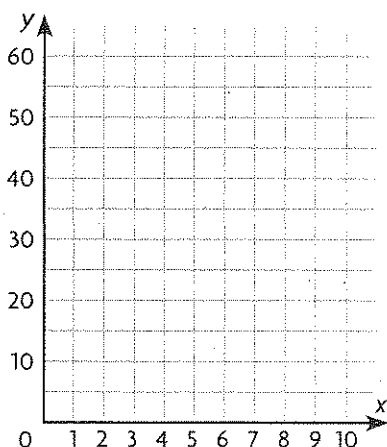


On Your Own

Graph and label the related number pairs as ordered pairs.
Then complete and use the rule to find the unknown term.

3. Multiply the number of inches by _____
to find the distance in miles.

Map (in.)	2	4	6	8	10
Miles	10	20	30	40	



4. Multiply the number of centiliters by _____
to find the equivalent number of milliliters.

Centiliters	1	2	3	4	5
Milliliters	10	20	30	40	

